

SCHOOL LEVEL EXAM (2024 – 2025)

 MATHS MARATHON Competition For Excellence	CLASS 1	
Total Questions : 50	Total Marks : 100	Time : 1 hour

INSTRUCTIONS TO THE STUDENT'S











1. Please do not open this question paper unless you are instructed to do so.
2. Additional 5 minutes will be given to the candidates for filling up the student's details before the start of the competition.
3. The paper consists of 5 different chapters of the textbook.
4. All questions are compulsory and consist of equal marks.
5. Each question is carrying 2 marks, there is no negative marking.
6. There is only one correct answer, hence mark one answer only.
7. Darken the circle with dark pencil or blue/black ball pen only.
8. Return the answer sheet along with the question paper to the supervisor at the end of the exam.
9. Extra Blank pages can be used for rough calculations.

Name - _____

SCHOOL - _____

ROLL NO - _____ CLASS - _____

Count and write the numbers

No	Count and write the number.	Count
1		
2		
3		
4		
5		
6		
7		
8		
9		
10		

11. How many suns are there? ☀ ☀ ☀ ☀ ☀ ☀

A) 7

B) 5

C) 6

12. What comes before 16?

A) 17

B) 15

C) 18



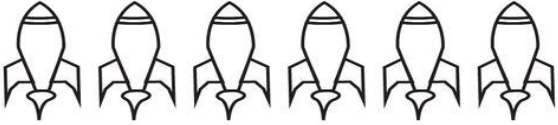


13. What comes after 14?

A) 15

B) 16

C) 17

Draw a line from each number to the matching set of objects.

5	
10	
2	
6	
8	

19. How many stars are there? ★ ★ ★ ★ ★ ★ ★ ★

- A) 3 B) 5 C) 8

20. What comes after 4?

- A) 5 B) 6 C) 7

21. Tim had 6 pencils. He broke 1 pencil while sharpening. How many pencils are left with Tim now?

- A) 5 B) 6 C) 7

22. Lily had 5 marbles. She lost 2 marbles. How many marbles does Lily have now?

- A) 2 B) 3 C) 5

23. David had 10 pencils. He lost 4 pencils. How many pencils does David have now?

- A) 6 B) 7 C) 8

24. Sarah had 1 cookie. Her brother gave her 5 more cookies. How many cookies does Sarah have now?

- A) 4 B) 5 C) 6

25. Amy had 2 cupcakes. Her friend gave her 5 more cupcakes. How many cupcakes does Amy have now?

- A) 6 B) 7 C) 8

26. Which number comes next in Increasing Order

- A) 7 B) 8 C) 9

6	7	8	?
---	---	---	---

27. Which number comes next in Increasing Order

- A) 0 B) 4 C) 3

1	2	?
---	---	---

28. Which number comes next in Decreasing Order

- A) 1 B) 3 C) 4

4	3	2	?
---	---	---	---

29. Arrange the numbers in increasing order: 3, 2, 4

- A) 3, 4, 2 B) 4, 3, 2 C) 2, 3, 4

30. Arrange the numbers in decreasing order: 3, 4, 5

- A) 3, 5, 4 B) 5, 4, 3 C) 4, 3, 5

31. What is $6 + 1$?

- A) 8 B) 6 C) 7

32. What is $3 + 6$?

- A) 8 B) 9 C) 7

33. What is $4 + 9$?

- A) 13 B) 7 C) 10

34. What is $5 + 5$?

- A) 11 B) 6 C) 10

35. What is $1 + 0$?

- A) 2 B) 0 C) 1

36. What is $2 + 8$?

- A) 10 B) 9 C) 11

37. What is $9 + 2$?

- A) 14 B) 11 C) 15

38. What is $3 + 3$?

- A) 7 B) 6 C) 8

39. What is $2 + 5$?

- A) 8 B) 7 C) 9

40. What is $1 + 7$?

- A) 8 B) 7 C) 9

41. What is $2 - 2$?

A) 2

B) 0

C) 4

42. What is $4 - 3$?

A) 1

B) 3

C) 4

43. What is $7 - 3$?

A) 3

B) 4

C) 5

44. What is $4 - 4$?

A) 0

B) 4

C) 3

45. What is $9 - 2$?

A) 4

B) 2

C) 7

46. What is $3 - 1$?

A) 1

B) 2

C) 4

47. What is $9 - 7$?

A) 7

B) 2

C) 4

48. What is $8 - 4$?

A) 8

B) 4

C) 7

49. What is $5 - 3$?

A) 4

B) 3

C) 2

50. What is $9 - 5$?

A) 3

B) 5

C) 4

Answer Section

No.	Ans	No.	Ans	No.	Ans	No.	Ans	No.	Ans
1	1	11	C	21	A	31	C	41	B
2	4	12	B	22	B	32	B	42	A
3	3	13	A	23	A	33	A	43	B
4	5	14	5 BOOK	24	C	34	C	44	A
5	6	15	10 FLOWERS	25	B	35	C	45	C
6	5	16	2 CAR	26	C	36	A	46	B
7	8	17	6 ROCKETS	27	C	37	B	47	B
8	5	18	8 BIRDS	28	A	38	B	48	B
9	6	19	C	29	C	39	B	49	C
10	6	20	A	30	B	40	A	50	C